

USN

--	--	--	--	--	--	--	--	--	--

17EC43

Fourth Semester B.E. Degree Examination, Feb./Mar. 2022 Control Systems

Time: 3 hrs.

Max. Marks: 100

Note: Answer any FIVE full questions, choosing ONE full question from each module.

Module-1

- 1 a. Define open loop and closed loop system and list the difference between these two. (05 Marks)
- b. For the mechanical system shown in Fig Q1(b).
 - i) Draw the equivalent mechanical system
 - ii) Write the differential equations of performance
 - iii) Draw the electrical network based on torque current analogy.

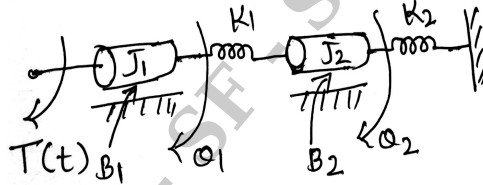


Fig Q1(b)

(08 Marks)

- c. Show that the two systems shown in Fig Q1(c) are analogous systems by comparing their transfer function.

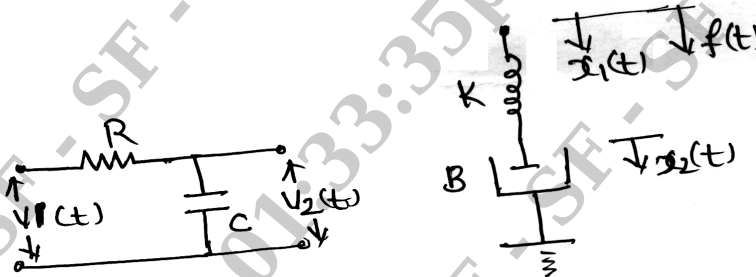


Fig Q1(c)

(07 Marks)

OR

- 2 a. Define the following terms with respect signal flow graph.
 - i) Node
 - ii) Forward path gain
 - iii) Self loop
 - iv) Non-touching loops.(04 Marks)
- b. For the block diagram shown in Fig Q2(b), determine the transfer function $\frac{C(s)}{R(s)}$ using block diagram reduction technique.

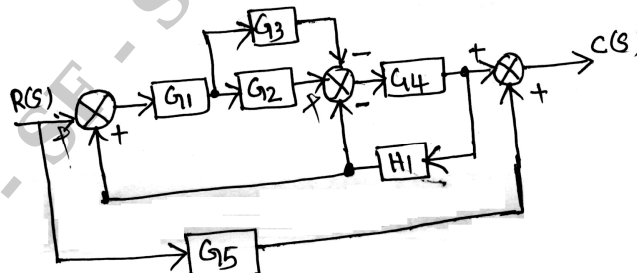


Fig Q2(b)

(08 Marks)

Important Note : 1. On completing your answers, compulsorily draw diagonal cross lines on the remaining blank pages.
2. Any revealing of identification, appeal to evaluator and /or equations written eg. 42+8 = 50, will be treated as malpractice.

- c. Using Mason's gain formula, find the transfer function $\frac{C(s)}{R(s)}$ for the signal flow graph shown in Fig Q2(c).

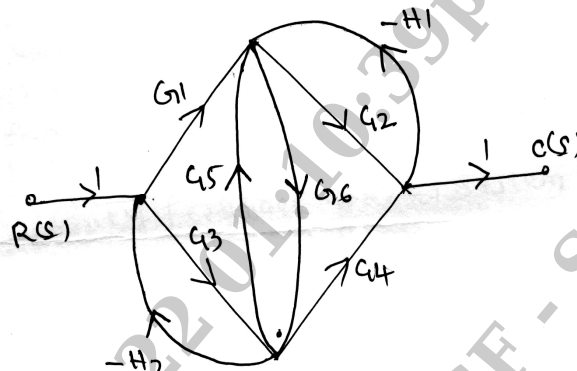


Fig Q2(c)

(08 Marks)

Module-2

- 3 a. Derive an expression for unit step response of first order system. (04 Marks)
 b. Derive an expression for i) Rise time t_r ii) Peak time t_p iii) Peak over shoot m_p (09 Marks)
 c. A second order system is given by $\frac{C(s)}{R(s)} = \frac{25}{s^2 + 6s + 25}$. Find i) rise time ii) settling time iii) Peak overshoot iv) Peak time. Also calculate expression for its output response. (07 Marks)

OR

- 4 a. Measurements conducted on a servomechanism shown the system response to be $c(t) = 1 + 0.2 e^{-60t} - 1.2 e^{-10t}$. When subjected to a step of 1V.
 i) Obtain an expression for the closed loop transfer function
 ii) Determine the undamped natural frequency and damping ratio of the system. (07 Marks)
 b. A unity feedback control system has $G(s) = \frac{40(s+2)}{s(s+1)(s+4)}$. Determine :
 i) Type of the system
 ii) All error coefficients
 iii) Error for the ramp input with magnitude 4. (07 Marks)
 c. With a neat block diagram explain the Proportional Integral and Derivative (PID) controller. (06 Marks)

Module-3

- 5 a. State and explain Routh's stability criterion for determining the stability of the system and mention its limitations. (06 Marks)
 b. The open loop transfer function of a unity feedback system is given by $G(s) = \frac{K}{s(1+0.4s)(1+0.25s)}$. Using RH criterion find the range of values of K for stability, marginal value of K and the frequency of sustained oscillation. (08 Marks)
 c. Determine the range of K such that the characteristics equation $s^3 + 3(K+1)s^2 + (7K+5)s + (4K+7) = 0$ has roots more negative than $s = -1$. (06 Marks)

OR

- 6 a. Determine the values of 'K' and 'P' for the open loop transfer function of a unity feedback system is given by $G(s) = \frac{K(s+1)}{s^3 + Ps^2 + 2s + 1}$ so that the system oscillates at a frequency of 2 rad/sec. (06 Marks)

- b. The open loop transfer function of a control system is given by $G(s)H(s) = \frac{K}{s(s+2)(s+4)}$. Find whether $s = -0.75$ and $s = -1 + j4$ is on the root locus or not using angle condition. (04 Marks)
- c. Sketch the root locus plot for the unity feedback system whose open loop transfer function is given by $G(s) = \frac{K}{s(s+2)(s+6)}$
- Find the range of 'K' for stability of the system
 - Find the value of 'K' for marginal stability. (10 Marks)

Module-4

- 7 a. Define the following terms with respect to Bode plots.
- Gain cross over frequency
 - Phase cross over frequency
 - Gain margin
 - Phase margin (04 Marks)
- b. With a neat circuit and relevant expressions, explain the lead compensator. (06 Marks)
- c. A unity feedback control system has $G(s) = \frac{100(0.1s+1)}{s(s+1)^2(0.01s+1)}$. Draw the Bode plot. Determine Gain margin and phase margin. Comment on the stability. (10 Marks)

OR

- 8 a. Using Nyquist stability criterion, determine the stability of a negative feedback control system whose open loop transfer function is given by $G(s)H(s) = \frac{100}{(s+1)(s+2)(s+3)}$. (10 Marks)
- b. A unity feedback control system has $G(s) = \frac{4}{(0.1s+1)^2(0.01s+1)}$. Draw the Bodeplot, comment of the stability. (10 Marks)

Module-5

- 9 a. With a neat schematic and relevant waveforms explain signal reconstruction with respect to digital control system. (06 Marks)
- b. State the advantages of state variable analysis. (04 Marks)
- c. Obtain the state model of the electrical network shown in Fig Q9(c)




Fig Q9(c)

(10 Marks)

OR

- 10 a. Obtain the state model for a system characterized by differential equation $\frac{d^3y}{dt^3} + 6\frac{d^2y}{dt^2} + 11\frac{dy}{dt} + 6y = u$ (06 Marks)
- b. The transfer function of a control system is given by $\frac{Y(s)}{U(s)} = \frac{6s^3 + 4s^2 + 3s + 10}{s^3 + 8s^2 + 4s + 20}$. Obtain the state model. (06 Marks)
- c. Obtain the transfer function of the system whose state output equations are given by
- $$\dot{x}_1 = -9x_1 - x_2 + 5u$$
- $$\dot{x}_2 = 15x_1 - x_2 + 2u$$
- $$y = 2x_1 + x_2$$
- (08 Marks)